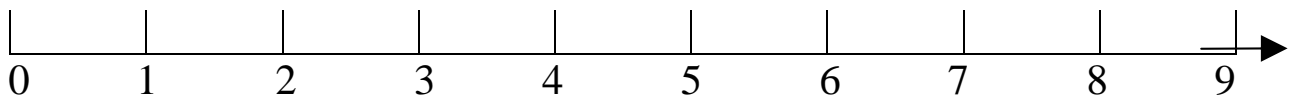


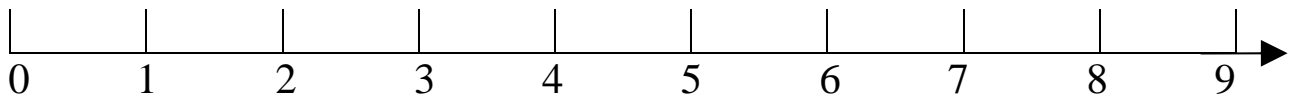
➤ ESEGUI LE ADDIZIONI SULLA LINEA DEI NUMERI E REGISTRA IL RISULTATO.



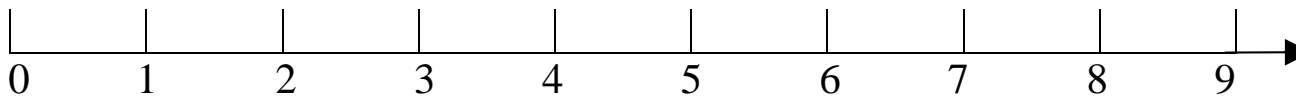
$4 + 2 = \dots\dots\dots$



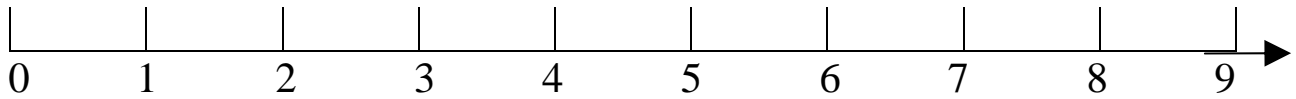
$6 + 3 = \dots\dots\dots$



$3 + 5 = \dots\dots\dots$



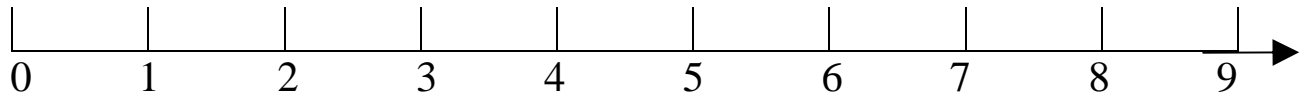
$4 + 4 = \dots\dots\dots$



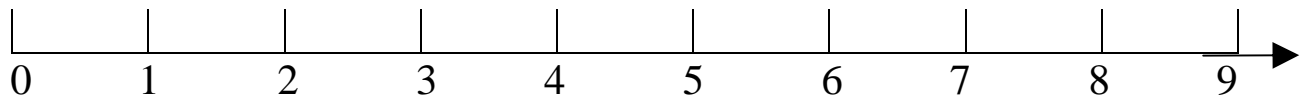
$8 + 0 = \dots\dots\dots$



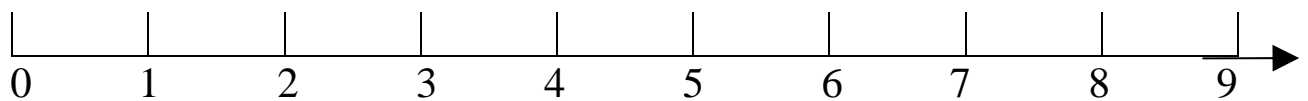
➤ ESEGUI LE SOTTRAZIONI SULLA LINEA DEI NUMERI E REGISTRA IL RISULTATO.



$$6 - 3 = \dots\dots\dots$$



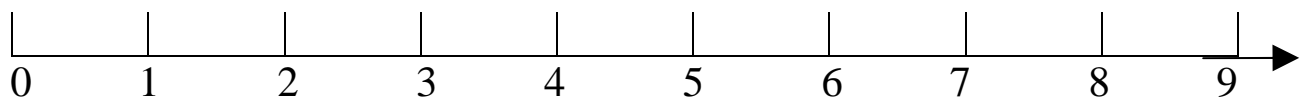
$$8 - 5 = \dots\dots\dots$$



$$7 - 6 = \dots\dots\dots$$



$$4 - 4 = \dots\dots\dots$$



$$5 - 0 = \dots\dots\dots$$

